

Year 5 Maths Activity Mat

Section 1

The temperature is 3°C. Two hours earlier, the temperature was 6°C colder. What was the temperature two hours earlier?

Section 2

A library has 14 bookcases. Each bookcase has 5 shelves. A librarian estimates there are 60 books on each shelf.

How many books are there in the library, rounded to the nearest one thousand?

Section 3

Complete these calculations:

$$\begin{array}{r} 49\ \square \\ + 3\ \square\ 8 \\ \hline \square\ 4\ 8 \end{array}$$

$$\begin{array}{r} 6\ \square\ 7 \\ - \square\ 4\ 1 \\ \hline \square\ 0\ 6 \end{array}$$

Section 4

Order the following fractions from smallest to largest:

$$\frac{1}{4} \quad \frac{3}{8} \quad \frac{3}{16} \quad \frac{1}{8}$$

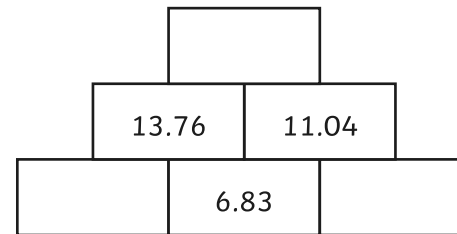


smallest

largest

Section 5

Adjacent squares are added together to give the number above. Complete the number wall.



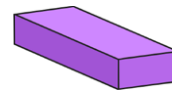
Section 6

1 gallon ≈ 4.5 litres

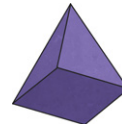
A car's petrol tank has a capacity of 50 litres. How many gallons is the capacity of the petrol tank to the nearest gallon.

Section 7

Write the name of these shapes.



.....



.....

Section 8

Children count the number of children who cycle to school each day.

Week	Number of children who cycled to school
Monday	8
Tuesday	12
Wednesday	3
Thursday	11
Friday	9

What is the highest number of children who could have cycled every day?

Year 5 Maths Activity Mat: 4

Answers

Section 1

The temperature is 3°C . Two hours earlier, the temperature was 6°C colder. What was the temperature two hours earlier?

-3°C

Section 2

A library has 14 bookcases. Each bookcase has 5 shelves. A librarian estimates there are 60 books on each shelf.

How many books are there in the library, rounded to the nearest one thousand?

4000

Section 3

Complete these calculations:

$$\begin{array}{r} 49\boxed{0} \\ + 3\boxed{5}8 \\ \hline \boxed{8}48 \end{array}$$

$$\begin{array}{r} 6\boxed{4}7 \\ - \boxed{4}41 \\ \hline \boxed{2}06 \end{array}$$

Section 4

Order the following fractions from smallest to largest:

$$\frac{1}{4} \quad \frac{3}{8} \quad \frac{3}{16} \quad \frac{1}{8}$$

$\frac{1}{8}$	$\frac{3}{16}$	$\frac{1}{4}$	$\frac{3}{8}$
---------------	----------------	---------------	---------------

smallest

largest

Section 5

Adjacent squares are added together to give the number above. Complete the number wall.



Section 6

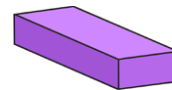
1 gallon \approx 4.5 litres

A car's petrol tank has a capacity of 50 litres. How many gallons is the capacity of the petrol tank to the nearest gallon.

11 gallons

Section 7

Write the name of these shapes.



cuboid



square-based pyramid

Section 8

Children count the number of children who cycle to school each day.

Week	Number of children who cycled to school
Monday	8
Tuesday	12
Wednesday	3
Thursday	11
Friday	9

What is the highest number of children who could have cycled every day?

3