

Year 4 Maths Activity Mat

Section 1

$\frac{2}{3}$ of 27 =

$\frac{2}{5}$ of 25 =

Section 2

$10 \times 3 + 6 \times 4 =$

$7 \times 5 + 2 \times 12 =$

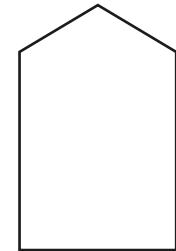
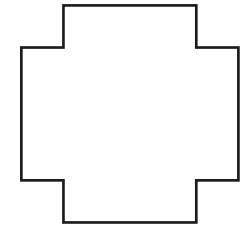
Section 5

Complete these calculations:

7	0	3		8	2	5	
-	2	8	0	-	3	5	0

Section 6

Draw the right angles in these shapes.



Section 3

Halima ran 3.9km today.

Tomorrow she wants to run 5.3km.

How much further will she need to run tomorrow?

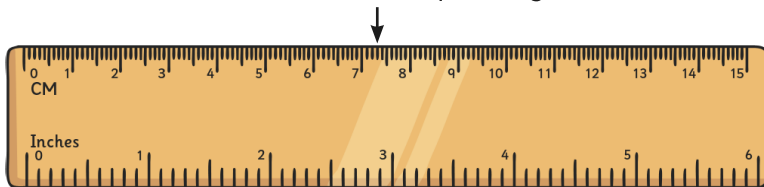
Section 7

How many 20 pences are there in £1.80?

How many five pences are there in 88p?

Section 4

What measurement is the arrow pointing to?



Section 8

There are 3 crates of 20 bananas in a truck, and 5 crates of 20 apples. How many pieces of fruit are there altogether? Write the correct number sentence to show this problem.

Year 4 Maths Activity Mat: 4

Answers

Section 1

$$\frac{2}{3} \text{ of } 27 = \boxed{18}$$

$$\frac{2}{5} \text{ of } 25 = \boxed{10}$$

Section 2

$$10 \times 3 + 6 \times 4 = \boxed{54}$$

$$7 \times 5 + 2 \times 12 = \boxed{59}$$

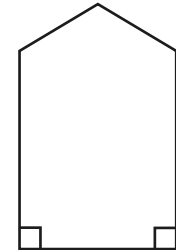
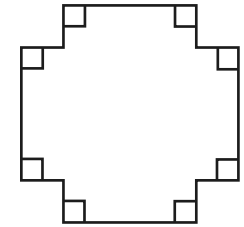
Section 5

Complete these calculations:

$$\begin{array}{r} 703 \\ - 280 \\ \hline 423 \end{array} \qquad \begin{array}{r} 825 \\ - 350 \\ \hline 475 \end{array}$$

Section 6

Draw the right angles in these shapes.



Section 3

Halima ran 3.9km today.

Tomorrow she wants to run 5.3km.

How much further will she need to run tomorrow?

1.1km

Section 7

How many 20 pences are there in £1.80?

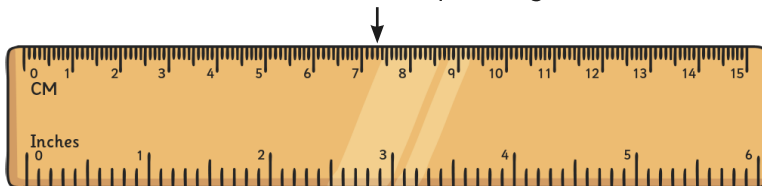
9

How many five pences are there in 88p?

17

Section 4

What measurement is the arrow pointing to?



7.3cm

Section 8

There are 3 crates of 20 bananas in a truck, and 5 crates of 20 apples. How many pieces of fruit are there altogether? Write the correct number sentence to show this problem.

$$\boxed{3 \times 20 + 5 \times 20 = 160}$$