

Section 1

Fill in the missing numbers:

$$72 \square 9 = 8$$

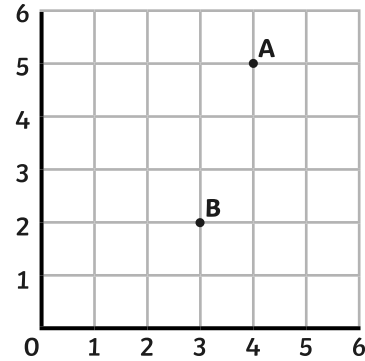
$$7 \times \square = 42$$

$$60 \div \square = 5$$

$$\square \times 3 = 27$$

Section 2

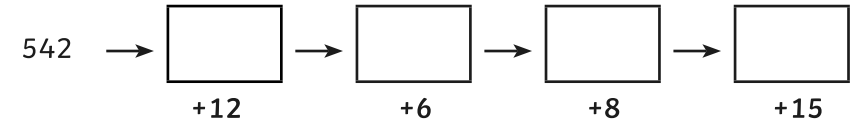
Write the coordinates for the following points:



A = B =

Section 3

Fill in the boxes.



Section 8

Work out $480 \div 4$.

Explain how you worked it out.

.....

Section 4

I think of a number.

I multiply it by 3.

I add 5.

I divide it by 8.

My answer is 4.

What was my number?

Section 5

Write the equivalent decimal or fraction:

$$\frac{4}{10} = \square$$

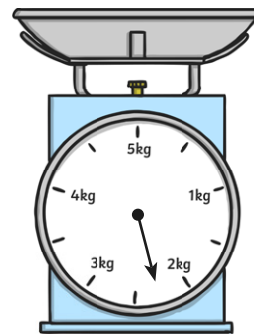
$$0.9 = \square$$

$$0.1 = \square$$

$$\frac{5}{10} = \square$$


Section 6

Round the weight to the nearest kg.



Section 7

What time will it be in 1 hour and 35 minutes?



Year 4 Maths Activity Mat: 2

Answers

Section 1

Fill in the missing numbers:

$$72 \div \boxed{9} = 8$$

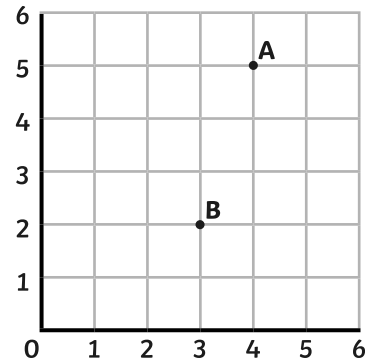
$$7 \times \boxed{6} = 42$$

$$60 \div \boxed{12} = 5$$

$$\boxed{9} \times 3 = 27$$

Section 2

Write the coordinates for the following points:



$$A = \boxed{4, 5} \quad B = \boxed{3, 2}$$

Section 3

Fill in the boxes.

$$542 \rightarrow \boxed{554} \rightarrow \boxed{560} \rightarrow \boxed{568} \rightarrow \boxed{583}$$

$+12 \quad +6 \quad +8 \quad +15$

Section 8

Work out $480 \div 4$.

120

Explain how you worked it out.

I know that $48 \div 4$ is 12 so $480 \div 4 = 120$

Section 4

I think of a number.

I multiply it by 3.

I add 5.

I divide it by 8.

My answer is 4.

What was my number?

9

Section 5

Write the equivalent decimal or fraction:

$$\frac{4}{10} = \boxed{0.4}$$

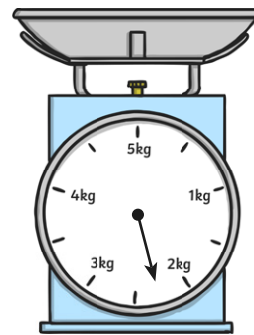
$$0.9 = \boxed{\frac{9}{10}}$$

$$0.1 = \boxed{\frac{1}{10}}$$

$$\frac{5}{10} = \boxed{0.5}$$

Section 6


Round the weight to the nearest kg.



2kg

Section 7

What time will it be in 1 hour and 35 minutes?



3:50