

Year 3 Spring 1 Maths Activity Mat 4

Section 1

What is $\frac{1}{2}$ of 20 counters?

Section 2

Fran works six hours a day for four days. How many hours has she worked altogether?

Section 3

Calculate:

$28 \div 4 =$

$84 \div 2 =$

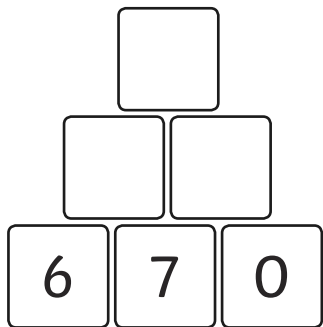
Section 4

Write down four multiples of three.

| | |
|----------------------|----------------------|
| <input type="text"/> | <input type="text"/> |
| <input type="text"/> | <input type="text"/> |

Section 5

Complete and solve this addition pyramid.



Section 6

Set the following equation out in column subtraction. Complete the calculation

$64 - 32 =$

Section 7

If it is half past 2 now, what time will it be in half an hour?

Section 8

Write the correct number beside the words.

twenty-two

fifteen

thirty

Year 3 Spring 1 Maths Activity Mat 4 - Answers

Section 1

What is $\frac{1}{2}$ of 20 counters?

10

Section 2

Fran works six hours a day for four days. How many hours has she worked altogether?

24

Section 3

Calculate:

$$28 \div 4 = 7$$

$$84 \div 2 = 42$$

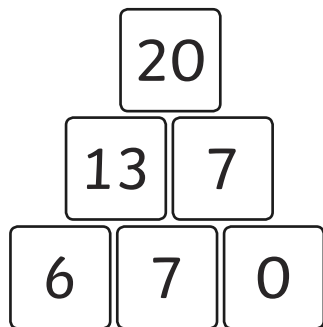
Section 4

Write down four multiples of three.

Multiple answers, e.g.
3, 6, 12, 15, 18, 21, 24,
27, 30, 33, 36

Section 5

Complete and solve this addition pyramid.



Section 6

Set the following equation out in column subtraction. Complete the calculation

$$64 - 32 =$$

$$\begin{array}{r} 64 \\ - 32 \\ \hline 42 \end{array}$$

Section 7

If it is half past 2 now, what time will it be in half an hour?

3 o'clock
3:00

Section 8

Write the correct number beside the words.

twenty-two 22

fifteen 15

thirty 30

Year 3 Spring 1 Maths Activity Mat 4

Section 1

What is $\frac{1}{4}$ of £2?

Section 2

Lin buys two oranges and a peach for 85p. Oranges cost 25p. How much does the peach cost?

Section 3

Calculate:

$88 \div 4 =$

$54 \div 2 =$

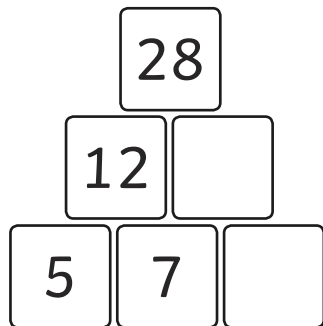
Section 4

Write down four multiples of four

| | |
|----------------------|----------------------|
| <input type="text"/> | <input type="text"/> |
| <input type="text"/> | <input type="text"/> |

Section 5

Complete and solve this addition pyramid.



Section 6

Set the following equation out in column subtraction. Complete the calculation.

$297 - 149 =$

Section 7

If it is quarter past four now, what time will it be in 45 minutes?

Section 8

Write the correct number or words.

13

forty-nine

One hundred and two

91

Year 3 Spring 1 Maths Activity Mat 4 - Answers

Section 1

What is $\frac{1}{4}$ of £2?

50p

Section 2

Lin buys two oranges and a peach for 85p. Oranges cost 25p. How much does the peach cost?

35p

Section 3

Calculate:

$$88 \div 4 = 22$$

$$54 \div 2 = 27$$

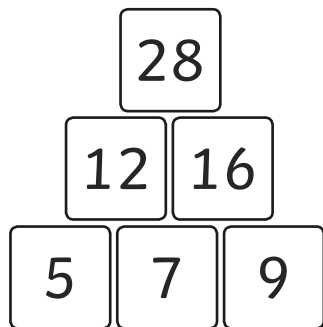
Section 4

Write down four multiples of four

Multiple answers, e.g.
4, 8, 12, 16, 20, 24, 28,
32, 36, 40, 44, 48

Section 5

Complete and solve this addition pyramid.



Section 6

Set the following equation out in column subtraction. Complete the calculation.

$$297 - 149 =$$

$$\begin{array}{r} 297 \\ - 149 \\ \hline 148 \end{array}$$

Section 7

If it is quarter past four now, what time will it be in 45 minutes?

5:00
5 o'clock

Section 8

Write the correct number or words.

13 thirteen

forty-nine 49

One hundred and two 102

91 ninety-one

Year 3 Spring 1 Maths Activity Mat 4

Section 1

What is $\frac{1}{10}$ of 40p?

Section 2

Cans of dog food cost 36p. How much do eight cans cost?

What change would you have from a £5 note?

Section 3

Calculate:

$135 \div 5 =$

$204 \div 4 =$

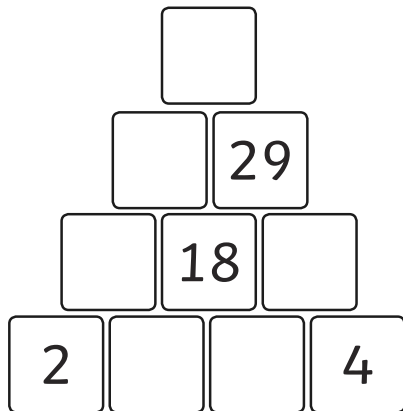
Section 4

Write down four multiples of eight.

| | |
|----------------------|----------------------|
| <input type="text"/> | <input type="text"/> |
| <input type="text"/> | <input type="text"/> |

Section 5

Complete and solve this addition pyramid.



Section 6

Set the following equation out in a column subtraction. Complete the calculation.

$8358 - 3851 =$

Section 7

If it is twenty past five now, what time will it be in 15 minutes?

Section 8

Write the correct words beside the numbers.

110

138

201

Year 3 Spring 1 Maths Activity Mat 4 - Answers

Section 1

What is $\frac{1}{10}$ of 40p?

4p

Section 2

Cans of dog food cost 36p. How much do eight cans cost?

£2.88

What change would you have from a £5 note?

£2.12

Section 3

Calculate:

$$135 \div 5 = 27$$

$$204 \div 4 = 51$$

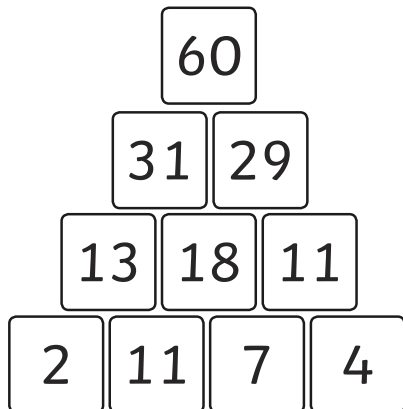
Section 4

Write down four multiples of eight.

Multiple answers, e.g.
8, 16, 24, 32, 40, 48,
56, 64, 72, 80, 88, 96

Section 5

Complete and solve this addition pyramid.



Section 6

Set the following equation out in a column subtraction. Complete the calculation.

$$\begin{array}{r} 8358 \\ - 3851 \\ \hline 4507 \end{array}$$

Section 7

If it is twenty past five now, what time will it be in 15 minutes?

5:35
twenty five to six

Section 8

Write the correct words beside the numbers.

110 one hundred and ten

138 one hundred and thirty-eight

201 two hundred and one